



Lesson 5.1

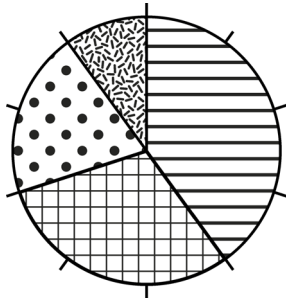
West Indies







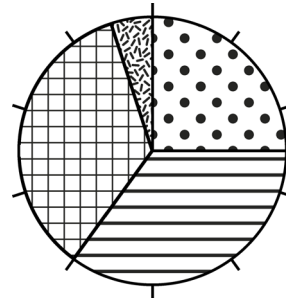
With the West Indies, or The West, area's of Middle America were implied, the current Caribbean and the colonies in the northern part of South- or Latin America. The name West Indies or The West stems from the time Christopher Columbus thought he had reached the Indies via the western route. The America's were later also called The New World, as opposed to the old world (Europe, Africa and Asia).





① Piechart

Write down how many percent:



	sailor %
	boatswain %
	boy %
	cook %



	sailor %
	boatswain %
	boy %
	cook %


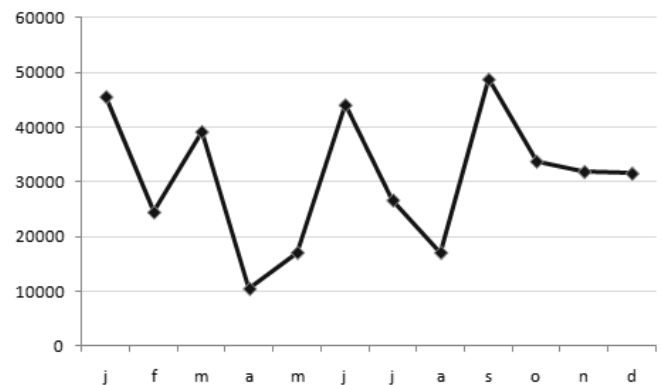
② Reading graphs

What do the letters at the bottom of the graph mean?

What do you notice about the line?

Interpretive question:


What do you think could be indicated here?



③ Make your own graph

Think of a subject that you would like to create a graph for: for example in which month do you celebrate the most birthdays? Which pets are most popular? What is the average allowance given in your class?

Collect information for a graph and make a line or bar graph.



④ Sea mile

In shipping sea miles are used to measure distance. A sea mile is equal to 1852 meters.

In crossing the Atlantic Ocean the ship covered 4652 sea miles. How many kilometers is this approximately?

.....
On an average day the ship covered 79 sea miles.
How many kilometers is this?

.....
Tip: use this box for your calculations →

